

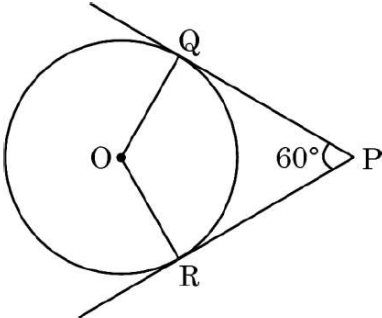
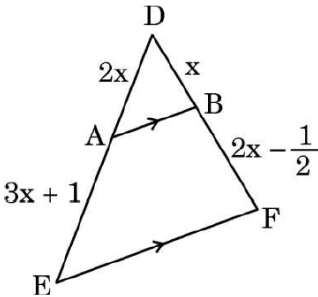
**Marking Scheme**  
**Strictly Confidential**  
**(For Internal and Restricted use only)**  
**Secondary School Examination, 2026**  
**MATHEMATICS (STANDARD) (041) (PAPER CODE 30/3/1)**

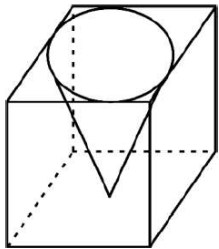
**General Instructions: -**

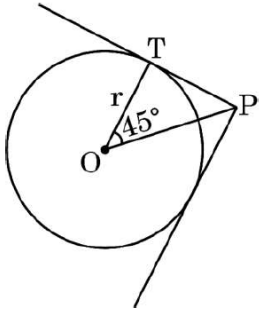
1.	You are aware that evaluation is the most important process in the actual and correct assessment of the candidates. A small mistake in evaluation may lead to serious problems which may affect the future of the candidates, education system and teaching profession. To avoid mistakes, it is requested that before starting evaluation, you must read and understand the Spot Evaluation Guidelines carefully.
2.	<b>“Evaluation policy is a confidential policy as it is related to the confidentiality of the examinations conducted, Evaluation done and several other aspects. It’s leakage to public in any manner could lead to derailment of the examination system and affect the life and future of millions of candidates. Sharing this policy/document to anyone, publishing in any magazine and printing in News Paper/Website etc. may invite action under various rules of the Board and BNS.”</b>
3.	Evaluation is to be done as per instructions provided in the Marking Scheme. It should not be done according to one’s own interpretation or any other consideration. Marking Scheme should be strictly adhered to and religiously followed. <b>However, while evaluating, answers which are based on latest information or knowledge and/or are innovative, they may be assessed for their correctness otherwise and due marks be awarded to them. In Class-X, while evaluating the Competency-based questions, please try to understand given answer and even if reply is not from Marking Scheme but correct competency is enumerated by the candidate, due marks should be awarded.</b>
4.	The Marking scheme carries only suggested value points for the answers. These are in the nature of Guidelines only and do not constitute the complete answer. The students can have their own expression and if the expression is correct, the due marks should be awarded accordingly.
5.	The Head-Examiner must go through the first five answer books evaluated by each evaluator on the first day, to ensure that evaluation has been carried out as per the instructions given in the Marking Scheme. If there is any variation, the same should be zero after deliberation and discussion. The remaining answer books meant for evaluation shall be given only after ensuring that there is no significant variation in the marking of individual evaluators.
6.	Evaluators will mark (✓) wherever answer is correct. For wrong answer CROSS ‘X’ be marked. Evaluators will not put right (✓) while evaluating which gives an impression that answer is correct and no marks are awarded. <b>This is most common mistake which evaluators are committing.</b>
7.	If a question has parts, please award marks on the right-hand side for each part. Marks awarded for different parts of the question should then be totalled up and written on the left-hand margin and encircled. This may be followed strictly.
8.	If a question does not have any parts, marks must be awarded on the left-hand margin and encircled. This may also be followed strictly.

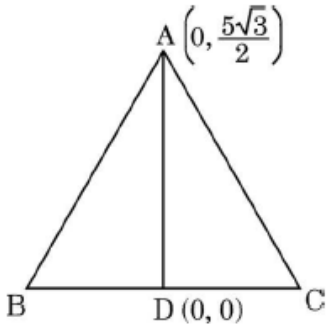
9.	If a student has attempted an extra question, answer of the question deserving more marks should be retained and the other answer scored out with a note “ <b>Extra Question</b> ”.
10.	No marks to be deducted for the cumulative effect of an error. It should be penalized only once.
11.	A full scale of marks <b>0 to 80</b> (example 0 to 80/70/60/50/40/30 marks as given in Question Paper) has to be used. Please do not hesitate to award full marks if the answer deserves it.
12.	Every examiner has to necessarily do evaluation work for full working hours i.e., 8 hours every day and evaluate 20 answer books per day in main subjects and 25 answer books per day in other subjects (Details are given in Spot Guidelines). This is in view of the reduced syllabus and number of questions in question paper.
13.	<p>Ensure that you do not make the following common types of errors committed by the Examiner in the past:-</p> <ul style="list-style-type: none"> <li>● Leaving answer or part thereof unassessed in an answer book.</li> <li>● Giving more marks for an answer than assigned to it.</li> <li>● Wrong totalling of marks awarded to an answer.</li> <li>● Wrong transfer of marks from the inside pages of the answer book to the title page.</li> <li>● Wrong question wise totalling on the title page.</li> <li>● Wrong totalling of marks of the two columns on the title page.</li> <li>● Wrong grand total.</li> <li>● Marks in words and figures not tallying/not same.</li> <li>● Wrong transfer of marks from the answer book to Online Award List.</li> <li>● Answers marked as correct, but marks not awarded. (Ensure that the right tick mark is correctly and clearly indicated. It should merely be a line. Same is with the X for incorrect answer.)</li> <li>● Half or a part of answer marked correct and the rest as wrong, but no marks awarded.</li> </ul>
14.	While evaluating the answer books if the answer is found to be totally incorrect, it should be marked as cross (X) and awarded zero (0) Marks.
15.	Any unassessed portion, non-carrying over of marks to the title page, or totaling error detected by the candidate shall damage the prestige of all the personnel engaged in the evaluation work as also of the Board. Hence, in order to uphold the prestige of all concerned, it is again reiterated that the instructions be followed meticulously and judiciously.
16.	The Examiners should acquaint themselves with the guidelines given in the “ <b>Guidelines for spot Evaluation</b> ” before starting the actual evaluation.
17.	Every Examiner shall also ensure that all the answers are evaluated, marks carried over to the title page, correctly totalled and written in figures and words.
18.	The candidates are entitled to obtain Photocopy of the Answer Book on request on payment of the prescribed processing fee. All Examiners/Additional Head Examiners/Head Examiners are once again reminded that they must ensure that evaluation is carried out strictly as per value points for each answer as given in the Marking Scheme.

**MARKING SCHEME**  
**MATHEMATICS (Subject Code-041)**  
**(PAPER CODE: 30/3/1)**

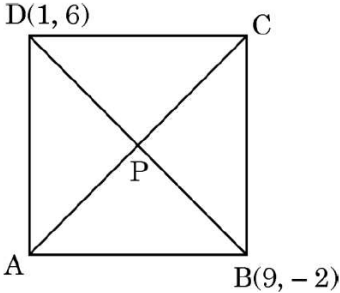
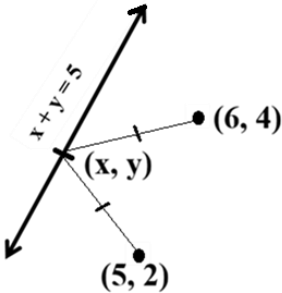
Q. No.	EXPECTED OUTCOMES/VALUE POINTS	Step	Marks
	<b>SECTION A</b> This section has <b>20</b> Multiple Choice Questions (MCQs) carrying 1 mark each.		
1.	<p>The roots of the quadratic equation <math>(x - 1)^2 = 16</math> are :</p> <p>(A) 5, 3</p> <p>(B) 4, - 4</p> <p>(C) 5, - 3</p> <p>(D) - 5, 3</p>		
Sol.	(C) 5, - 3		1
2.	<p>In the given figure, PQ and PR are tangents to a circle with centre O and radius 3 cm. If <math>\angle QPR = 60^\circ</math>, then the length of each tangent is :</p>  <p>(A) <math>3\sqrt{3}</math> cm                      (B) 3 cm</p> <p>(C) 6 cm                                (D) <math>\sqrt{3}</math> cm</p>		
Sol.	(A) $3\sqrt{3}$ cm		1
3.	<p>In <math>\triangle DEF</math>, <math>AB \parallel EF</math>. The value of x is :</p>  <p>(A) 0, 2                                (B) 2 only</p> <p>(C) - 2                                 (D) 1</p>		
Sol.	(B) 2 only		1

<b>4.</b>	$(3 \times 11 \times 13 + 3)$ is : (A) a prime number (B) divisible by 13 (C) a composite number (D) an odd number		
<b>Sol.</b>	(C) a composite number		<b>1</b>
<b>5.</b>	Two dice are rolled together. The probability that the sum of the numbers obtained is divisible by 6, is : (A) $\frac{1}{6}$ (B) $\frac{11}{36}$ (C) $\frac{1}{12}$ (D) $\frac{1}{4}$		
<b>Sol.</b>	(A) $\frac{1}{6}$		<b>1</b>
<b>6.</b>	The number of multiples of 4 lying between 12 and 250 is : (A) 59 (B) $59 \cdot 5$ (C) 60 (D) 61		
<b>Sol.</b>	(A) 59		<b>1</b>
<b>7.</b>	A cone of maximum size is carved out from a solid cube of edge length $l$ . The volume of the cone is :  (A) $\frac{\pi l^3}{12}$ (B) $\frac{\pi l^3}{3}$ (C) $l^3 \left(1 - \frac{\pi}{3}\right)$ (D) $\frac{\pi l^3}{8}$		
<b>Sol.</b>	(A) $\frac{\pi l^3}{12}$		<b>1</b>
<b>8.</b>	Equation of another line parallel to the line represented by $2x - 6y = 7$ is : (A) $y = 3x - 7$ (B) $2x = 9 - 6y$ (C) $x - 3y = 7$ (D) $x = \frac{7}{2} - 3y$		
<b>Sol.</b>	(C) $x - 3y = 7$		<b>1</b>
<b>9.</b>	If the length of the shadow of a tower is $\sqrt{3}$ times that of its height, then altitude of the Sun is : (A) $45^\circ$ (B) $30^\circ$ (C) $60^\circ$ (D) $15^\circ$		
<b>Sol.</b>	(B) $30^\circ$		<b>1</b>

<b>10.</b>	<p>If the roots of the quadratic equation <math>\sqrt{3}x^2 - kx + 2\sqrt{3} = 0</math> are real and equal, then the value(s) of k is/are :</p> <p>(A) <math>\pm \sqrt{24}</math> (B) 0 (C) 4 (D) -5</p>		
<b>Sol.</b>	(A) $\pm \sqrt{24}$		<b>1</b>
<b>11.</b>	<p>The <math>n^{\text{th}}</math> term of the A.P. <math>-\frac{1}{3}, \frac{2}{3}, \frac{5}{3}, \frac{8}{3}, \dots</math> is :</p> <p>(A) <math>3n - 4</math> (B) <math>n - \frac{4}{3}</math> (C) <math>\frac{n-2}{3}</math> (D) <math>\frac{n-4}{3}</math></p>		
<b>Sol.</b>	(B) $n - \frac{4}{3}$		<b>1</b>
<b>12.</b>	<p>In the given figure, PT is a tangent to the circle with centre O and radius r. If <math>\angle POT = 45^\circ</math>, then the length of OP is :</p>  <p>(A) <math>r\sqrt{2}</math> (B) <math>\sqrt{2}r</math> (C) <math>2r</math> (D) <math>r^2</math></p>		
<b>Sol.</b>	(A) $r\sqrt{2}$		<b>1</b>
<b>13.</b>	<p>It is given that <math>\triangle ABC \sim \triangle QRP</math> such that <math>AB = 9</math> cm, <math>BC = 5</math> cm and <math>PR = 2</math> cm. Length of side QR is :</p> <p>(A) 0.9 cm (B) <math>\frac{5}{18}</math> cm (C) <math>\frac{10}{9}</math> cm (D) 3.6 cm</p>		
<b>Sol.</b>	(D) 3.6 cm		<b>1</b>
<b>14.</b>	<p>The sum and product of zeroes of a quadratic polynomial <math>p(x)</math> are <math>-\frac{1}{3}</math> and 2 respectively. The polynomial <math>p(x)</math> is :</p> <p>(A) <math>3x^2 - x + 6</math> (B) <math>x^2 + \frac{1}{3}x - 2</math> (C) <math>3x^2 - x + 2</math> (D) <math>-3x^2 - x - 6</math></p>		
<b>Sol.</b>	(D) $-3x^2 - x - 6$		<b>1</b>

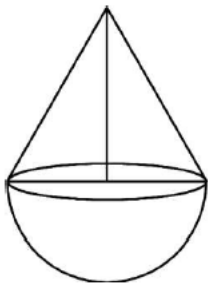
<b>15.</b>	<p>Given that <math>\sin 2\alpha = \frac{\sqrt{3}}{2}</math>, the value of <math>\sin 3\alpha</math> is :</p> <p>(A) <math>\frac{3\sqrt{3}}{4}</math> (B) <math>\frac{1}{2}</math>  (C) 1 (D) <math>\frac{\sqrt{3}}{4}</math></p>		
<b>Sol.</b>	(C) 1		<b>1</b>
<b>16.</b>	<p>The median and mode of a distribution are 25.2 and 26.1 respectively. The mean of the distribution is :</p> <p>(A) 24.75 (B) 24.25  (C) 24.3 (D) 25.5</p>		
<b>Sol.</b>	(A) 24.75		<b>1</b>
<b>17.</b>	<p>In the given figure, <math>\Delta ABC</math> is an equilateral triangle. AD is a median of the triangle joining the points <math>A\left(0, \frac{5\sqrt{3}}{2}\right)</math>, <math>D(0, 0)</math>. Points B and C are (in same order) :</p>  <p>(A) <math>(-5, 0), (5, 0)</math>  (B) <math>\left(-\frac{5}{2}, 0\right), \left(\frac{5}{2}, 0\right)</math>  (C) <math>(-10, 0), (10, 0)</math>  (D) <math>(-5\sqrt{3}, 0), (5\sqrt{3}, 0)</math></p>		
<b>Sol.</b>	(B) $\left(-\frac{5}{2}, 0\right), \left(\frac{5}{2}, 0\right)$		<b>1</b>
<b>18.</b>	<p>The value of <math>\left(\frac{1}{2} \tan^2 45^\circ - \cos^2 60^\circ\right)</math> is :</p> <p>(A) 0  (B) <math>-\frac{1}{2}</math>  (C) <math>\frac{1}{4}</math>  (D) <math>-\frac{1}{4}</math></p>		
<b>Sol.</b>	(C) $\frac{1}{4}$		<b>1</b>

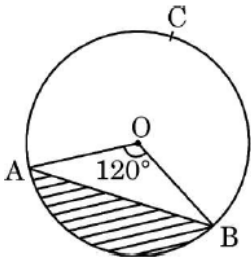
	<p>Questions number <b>19</b> and <b>20</b> are Assertion and Reason based questions. Two statements are given, one labelled as Assertion (A) and the other is labelled as Reason (R). Select the correct answer to these questions from the codes (A), (B), (C) and (D) as given below.</p> <p>(A) Both Assertion (A) and Reason (R) are true and Reason (R) is the correct explanation of the Assertion (A).</p> <p>(B) Both Assertion (A) and Reason (R) are true, but Reason (R) is <b>not</b> the correct explanation of the Assertion (A).</p> <p>(C) Assertion (A) is true, but Reason (R) is false.</p> <p>(D) Assertion (A) is false, but Reason (R) is true.</p>		
<b>19.</b>	<p>Assertion (A) : Radius is the smallest distance of a tangent from the centre of the circle.</p> <p>Reason (R) : Radius is perpendicular to the tangent.</p>		
<b>Sol.</b>	(A) Both Assertion (A) and Reason (R) are true and Reason (R) is the correct explanation of the Assertion (A).		<b>1</b>
<b>20.</b>	<p>Assertion (A) : <math>\tan 2\theta</math> is not defined at <math>\theta = 45^\circ</math>.</p> <p>Reason (R) : <math>\sin 90^\circ \neq \cos 90^\circ</math>.</p>		
<b>Sol.</b>	(B) Both Assertion (A) and Reason (R) are true, but Reason (R) is not the correct explanation of the Assertion (A).		<b>1</b>
	<b>SECTION B</b>		
	This section has <b>5</b> Very Short Answer (VSA) type questions carrying 2 marks each.		
<b>21.</b>	Find the length of the plank that can be used to measure the lengths 4 m 20 cm and 5 m 4 cm exactly, in the least time.		
<b>Sol.</b>	<p>4 m 20 cm = 420 cm and 5 m 4 cm = 504 cm</p> <p>Size of plank should be maximum, so we will find HCF (420, 504)</p> <p><math>420 = 2^2 \times 3 \times 5 \times 7</math> and <math>504 = 2^3 \times 3^2 \times 7</math></p> <p>HCF (420, 504) = 84</p> <p><math>\therefore</math> the required length of the plank is 84 cm</p>	<p><b>I</b></p> <p><b>II</b></p> <p><b>III</b></p>	<p><math>\frac{1}{2}</math></p> <p><b>1</b></p> <p><math>\frac{1}{2}</math></p>
<b>22 (a)</b>	In an A.P., the first term is 32 and the last term is - 10. If the common difference is - 2, then find the number of terms and their sum.		
<b>Sol.</b>	<p>Here <math>a = 32</math>, <math>l = -10</math> and <math>d = -2</math></p> <p><math>\therefore 32 + (n - 1)(-2) = -10</math></p> <p><math>\Rightarrow n = 22</math></p> <p><math>S_{22} = \frac{22}{2} \times [32 + (-10)]</math></p> <p><math>= 242</math></p>	<p><b>I</b></p> <p><b>II</b></p> <p><b>III</b></p> <p><b>IV</b></p>	<p><math>\frac{1}{2}</math></p> <p><math>\frac{1}{2}</math></p> <p><math>\frac{1}{2}</math></p> <p><math>\frac{1}{2}</math></p>
	<b>OR</b>		

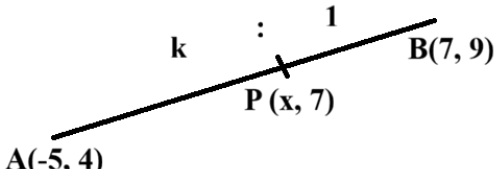
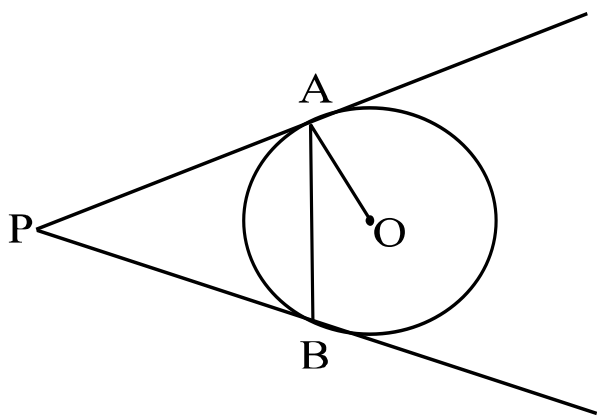
<b>22 (b)</b>	Find the sum of the first 28 terms of an A.P. whose $n^{\text{th}}$ term is given by $a_n = 3n - 2$ .		
<b>Sol.</b>	$a_1 = 3(1) - 2 = 1$ and $a_{28} = 3(28) - 2 = 82$ $S_{28} = \frac{28}{2} \times (1 + 82)$ $= 1162$	<b>I</b> <b>II</b> <b>III</b> <b>IV</b>	$\frac{1}{2}$ $\frac{1}{2}$ $\frac{1}{2}$ $\frac{1}{2}$
<b>23 (a)</b>	<p>Diagonals AC and BD of square ABCD intersect at P. Coordinates of points B and D are <math>(9, -2)</math> and <math>(1, 6)</math> respectively.</p>  <p>(i) Find the co-ordinates of point P.</p> <p>(ii) Find the length of the side of the square.</p>		
<b>Sol.</b>	<p>(i) Coordinates of P are <math>\left(\frac{9+1}{2}, \frac{-2+6}{2}\right) = (5, 2)</math></p> <p>(ii) <math>2 AB^2 = BD^2</math>  <math>\Rightarrow 2 AB^2 = (9 - 1)^2 + (-2 - 6)^2</math>  <math>\Rightarrow AB = 8</math>  Hence, the length of the side of square is 8 units.</p>	<b>I</b>  <b>II</b> <b>III</b>	<b>1</b>  $\frac{1}{2}$ $\frac{1}{2}$
	<b>OR</b>		
<b>23 (b)</b>	Find the coordinates of a point on the line $x + y = 5$ which is equidistant from $(6, 4)$ and $(5, 2)$ .		
<b>Sol.</b>	 <p>Let the required point be <math>(x, y)</math> which is equidistant from <math>(6, 4)</math> and <math>(5, 2)</math>  <math>\therefore (6 - x)^2 + (4 - y)^2 = (5 - x)^2 + (2 - y)^2</math></p>	<b>I</b>	<b>1</b>

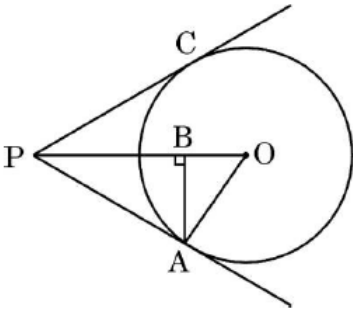
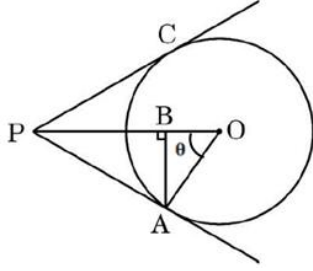




25.	<p>A toy is in the form of a cone mounted on a hemisphere of radius 7 cm. The total height of the toy is 31 cm. Find the total surface area of the toy.</p> 		
Sol.	<p>Height of conical part = <math>31 - 7 = 24</math> cm</p> <p>Slant height of conical part = <math>\sqrt{(7)^2 + (24)^2} = 25</math> cm</p> <p>TSA of the toy = CSA of conical part + CSA of hemispherical part</p> $= \frac{22}{7} \times 7 \times 25 + 2 \times \frac{22}{7} \times 7 \times 7$ $= 858 \text{ cm}^2$ <p>So, the total surface area of the toy is <math>858 \text{ cm}^2</math>.</p>	<p><b>I</b></p> <p><b>II</b></p> <p><b>III</b></p>	<p><math>\frac{1}{2}</math></p> <p><b>1</b></p> <p><math>\frac{1}{2}</math></p>
	<p style="text-align: center;"><b>SECTION C</b></p> <p>This section has 6 Short Answer (SA) type questions carrying 3 marks each.</p>		
26 (a)	<p>If <math>\sin \theta + \cos \theta = \sqrt{3}</math>, then prove that <math>\tan \theta + \cot \theta = 1</math></p>		
Sol.	<p><math>(\sin \theta + \cos \theta)^2 = (\sqrt{3})^2</math></p> $\Rightarrow \sin^2 \theta + \cos^2 \theta + 2 \sin \theta \cos \theta = 3$ $\Rightarrow \sin \theta \cos \theta = 1 \quad \text{--- (i)}$ <p>LHS = <math>\tan \theta + \cot \theta = \frac{\sin \theta}{\cos \theta} + \frac{\cos \theta}{\sin \theta} = \frac{\sin^2 \theta + \cos^2 \theta}{\cos \theta \sin \theta} = \frac{1}{\cos \theta \sin \theta}</math></p> $= 1 \quad [\text{using (i)}]$ $= \text{RHS}$	<p><b>I</b></p> <p><b>II</b></p> <p><b>III</b></p> <p><b>IV</b></p>	<p><math>\frac{1}{2}</math></p> <p><b>1</b></p> <p><b>1</b></p> <p><math>\frac{1}{2}</math></p>
	<b>OR</b>		
26 (b)	<p>Prove that : <math>(\sin A + \sec A)^2 + (\cos A + \operatorname{cosec} A)^2 = (1 + \sec A \operatorname{cosec} A)^2</math></p>		
Sol.	<p>LHS = <math>\left(\sin A + \frac{1}{\cos A}\right)^2 + \left(\cos A + \frac{1}{\sin A}\right)^2</math></p> $= \sin^2 A + \frac{1}{\cos^2 A} + \frac{2 \sin A}{\cos A} + \cos^2 A + \frac{1}{\sin^2 A} + \frac{2 \cos A}{\sin A}$ $= 1 + \left(\frac{1}{\sin^2 A} + \frac{1}{\cos^2 A}\right) + 2 \left(\frac{\sin A}{\cos A} + \frac{\cos A}{\sin A}\right)$ $= 1 + \frac{1}{\cos^2 A \sin^2 A} + \frac{2}{\cos A \sin A}$ $= 1 + \sec^2 A \operatorname{cosec}^2 A + 2 \sec A \operatorname{cosec} A$ $= (1 + \sec A \operatorname{cosec} A)^2 = \text{RHS}$	<p><b>I</b></p> <p><b>II</b></p> <p><b>III</b></p> <p><b>IV</b></p>	<p><math>\frac{1}{2}</math></p> <p><b>1</b></p> <p><b>1</b></p> <p><math>\frac{1}{2}</math></p>

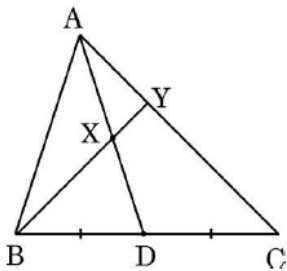
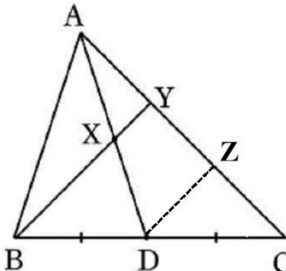
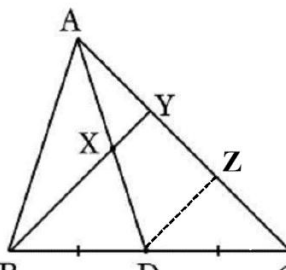
27.	<p>In the given figure, chord AB subtends an angle of <math>120^\circ</math> at the centre of the circle with radius 7 cm. Find (i) perimeter of major sector OACB, and (ii) area of the shaded segment, if area of <math>\Delta OAB = 21.2 \text{ cm}^2</math>.</p> 		
Sol.	<p>(i) Perimeter of major sector = length of major arc ACB + <math>2 \times</math> radius</p> $= \frac{(360-120)}{360} \times 2 \times \frac{22}{7} \times 7 + 2 \times 7$ $= \frac{130}{3} \text{ cm or } 43.3 \text{ cm}$ <p>So, perimeter of major sector is <math>\frac{130}{3} \text{ cm}</math> or 43.3 cm</p> <p>(ii) Area of shaded segment = Area of minor sector – Area of <math>\Delta OAB</math></p> $= \frac{120}{360} \times \frac{22}{7} \times 7 \times 7 - 21.2$ $= 30.1 \text{ cm}^2$ <p>So, area of shaded segment is <math>30.1 \text{ cm}^2</math>.</p>	<p><b>I</b></p> <p><b>II</b></p> <p><b>III</b></p> <p><b>IV</b></p>	<p><b>1</b></p> <p><math>\frac{1}{2}</math></p> <p><b>1</b></p> <p><math>\frac{1}{2}</math></p>
28.	Prove that $\sqrt{5}$ is an irrational number.		
Sol.	<p>Let <math>\sqrt{5}</math> be a rational number.</p> <p><math>\therefore \sqrt{5} = \frac{p}{q}</math>, where <math>q \neq 0</math> and <math>p</math> &amp; <math>q</math> are coprime.</p> <p><math>5q^2 = p^2 \Rightarrow p^2</math> is divisible by 5 <math>\Rightarrow p</math> is divisible by 5 ----- (i)</p> <p>Let <math>p = 5a</math>, where 'a' is some integer</p> <p><math>25a^2 = 5q^2 \Rightarrow q^2 = 5a^2 \Rightarrow q^2</math> is divisible by 5 <math>\Rightarrow q</math> is divisible by 5 ----- (ii)</p> <p>(i) and (ii) leads to contradiction as 'p' and 'q' are coprime.</p> <p><math>\therefore \sqrt{5}</math> is an irrational number.</p>	<p><b>I</b></p> <p><b>II</b></p> <p><b>III</b></p> <p><b>IV</b></p>	<p><math>\frac{1}{2}</math></p> <p><b>1</b></p> <p><b>1</b></p> <p><math>\frac{1}{2}</math></p>
29.	Find two consecutive negative integers, sum of whose squares is 481.		
Sol.	<p>Let two consecutive negative integers be <math>x</math> and <math>(x + 1)</math></p> <p>According to given statement,</p> $x^2 + (x + 1)^2 = 481$ $\Rightarrow x^2 + x - 240 = 0$ $\Rightarrow (x + 16)(x - 15) = 0$ $\therefore x = -16 \text{ or } 15$ <p><math>x = 15</math> does not satisfy the given condition.</p> <p>So, required integers are <math>-16</math> and <math>-15</math>.</p>	<p><b>I</b></p> <p><b>II</b></p> <p><b>III</b></p> <p><b>IV</b></p>	<p><b>1</b></p> <p><math>\frac{1}{2}</math></p> <p><b>1</b></p> <p><math>\frac{1}{2}</math></p>

<b>30.</b>	A point P(x, 7) divides a line segment joining the points A(-5, 4) and B(7, 9) in a certain ratio. Find the ratio and hence find the value of x.		
<b>Sol.</b>	 <p>Let AP : PB = k : 1</p> $\therefore 7 = \frac{9k + 4}{k + 1} \Rightarrow k = \frac{3}{2}$ <p>So, required ratio is 3 : 2</p> $\text{Hence, } x = \frac{7 \times 3 + (-5) \times 2}{3 + 2} = \frac{11}{5}$	<b>I</b> <b>II</b> <b>III</b> <b>IV</b>	$\frac{1}{2}$ <b>1</b> $\frac{1}{2}$ <b>1</b>
<b>31 (a)</b>	Two tangents PA and PB are drawn to a circle with centre O from an external point P. Prove that $\angle APB = 2 \angle OAB$ .		
<b>Sol.</b>	 <p>Correct figure.</p> <p><math>OA \perp AP</math></p> $\therefore \angle PAB = 90^\circ - \angle OAB \quad \text{--- (i)}$ <p><math>PA = PB</math></p> $\therefore \angle PAB = \angle PBA$ <p>Hence, <math>\angle APB = 180^\circ - 2\angle PAB</math></p> <p>Using (i), <math>\angle APB = 180^\circ - 2(90^\circ - \angle OAB)</math></p> $\Rightarrow \angle APB = 2\angle OAB$	<b>I</b> <b>II</b>  <b>III</b> <b>IV</b> <b>V</b>	$\frac{1}{2}$ $\frac{1}{2}$  <b>1</b> $\frac{1}{2}$ $\frac{1}{2}$
	<b>OR</b>		

31 (b)	<p>In the given figure, PA is the tangent to the circle with centre O such that OA = 10 cm, AB = 8 cm and AB <math>\perp</math> OP. Find the length of PB.</p> 		
Sol.	 <p>In right angled <math>\Delta OBA</math>, <math>OB = \sqrt{(10)^2 - (8)^2} = 6</math> cm</p> <p>Let <math>\angle AOB = \theta</math></p> <p>So, <math>\tan \theta = \frac{8}{6}</math> --- (i)</p> <p>In right angled <math>\Delta OAP</math></p> $\frac{AP}{10} = \tan \theta$ $\therefore \frac{AP}{10} = \frac{8}{6} \text{ [using (i)]}$ $\Rightarrow AP = \frac{40}{3} \text{ cm}$ $\therefore OP = \sqrt{\left(\frac{40}{3}\right)^2 + (10)^2} = \frac{50}{3} \text{ cm}$ $PB = OP - OB = \frac{50}{3} - 6 = \frac{32}{3} \text{ cm or } 10.6 \text{ cm}$ <p><b>Alternate solution:</b></p> <p>In right angled <math>\Delta OBA</math>,</p> $OB = \sqrt{(10)^2 - (8)^2} = 6 \text{ cm}$ <p>In right angled <math>\Delta PBA</math></p> $PA^2 = PB^2 + (8)^2 = PB^2 + 64 \text{ --- (i)}$ <p>In right angled <math>\Delta PAO</math></p> $PA^2 = OP^2 - (10)^2 = (PB + 6)^2 - 100 \text{ --- (ii)}$ <p>From (i) and (ii), we have</p> $PB^2 + 64 = (PB + 6)^2 - 100 \Rightarrow PB = \frac{32}{3} \text{ cm or } 10.6 \text{ cm}$	<p><b>I</b></p> <p><b>II</b></p> <p><b>III</b></p> <p><b>IV</b></p> <p><b>V</b></p> <p><b>VI</b></p> <p><b>I</b></p> <p><b>II</b></p> <p><b>III</b></p> <p><b>IV</b></p>	<p><math>\frac{1}{2}</math></p> <p><math>\frac{1}{2}</math></p> <p><math>\frac{1}{2}</math></p> <p><math>\frac{1}{2}</math></p> <p><math>\frac{1}{2}</math></p> <p><math>\frac{1}{2}</math></p> <p><math>\frac{1}{2}</math></p> <p><b>1</b></p> <p><b>1</b></p>

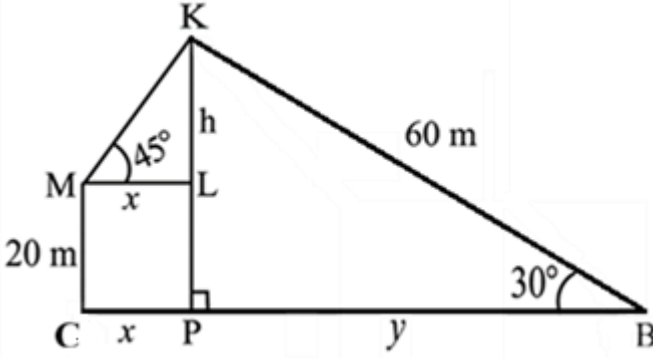
	<b>SECTION D</b>																										
	This section has <b>4</b> Long Answer (LA) type questions carrying 5 marks each.																										
<b>32 (a)</b>	The median of the following data is 137. Find the values of x and y, given that total of frequencies is 68. <table><tr><td><i>Class</i></td><td><i>Frequency</i></td></tr><tr><td>65 – 85</td><td>4</td></tr><tr><td>85 – 105</td><td>5</td></tr><tr><td>105 – 125</td><td>x</td></tr><tr><td>125 – 145</td><td>20</td></tr><tr><td>145 – 165</td><td>14</td></tr><tr><td>165 – 185</td><td>y</td></tr><tr><td>185 – 205</td><td>4</td></tr></table>			<i>Class</i>	<i>Frequency</i>	65 – 85	4	85 – 105	5	105 – 125	x	125 – 145	20	145 – 165	14	165 – 185	y	185 – 205	4								
<i>Class</i>	<i>Frequency</i>																										
65 – 85	4																										
85 – 105	5																										
105 – 125	x																										
125 – 145	20																										
145 – 165	14																										
165 – 185	y																										
185 – 205	4																										
<b>Sol.</b>	<table><tr><td><b>Class</b></td><td><b><i>f</i></b></td><td><b><i>cf</i></b></td></tr><tr><td>65 – 85</td><td>4</td><td>4</td></tr><tr><td>85 – 105</td><td>5</td><td>9</td></tr><tr><td>105 – 125</td><td>x</td><td>9 + x</td></tr><tr><td>125 – 145</td><td>20</td><td>29 + x</td></tr><tr><td>145 – 165</td><td>14</td><td>43 + x</td></tr><tr><td>165 – 185</td><td>y</td><td>43 + x + y</td></tr><tr><td>185 – 205</td><td>4</td><td>47 + x + y</td></tr></table> <p>Given, Median = 137 ∴ Median Class is 125 – 145. <math display="block">125 + \left[ \frac{\frac{68}{2} - (9+x)}{20} \right] \times 20 = 137</math> ⇒ x = 13 Also, 47 + x + y = 68 ∴ 47 + 13 + y = 68 ⇒ y = 8</p>	<b>Class</b>	<b><i>f</i></b>	<b><i>cf</i></b>	65 – 85	4	4	85 – 105	5	9	105 – 125	x	9 + x	125 – 145	20	29 + x	145 – 165	14	43 + x	165 – 185	y	43 + x + y	185 – 205	4	47 + x + y	Correct table	<b>I</b> <b>1½</b>  <b>II</b> ½  <b>III</b> <b>1</b>  <b>IV</b> <b>1</b>  <b>V</b> <b>1</b>
<b>Class</b>	<b><i>f</i></b>	<b><i>cf</i></b>																									
65 – 85	4	4																									
85 – 105	5	9																									
105 – 125	x	9 + x																									
125 – 145	20	29 + x																									
145 – 165	14	43 + x																									
165 – 185	y	43 + x + y																									
185 – 205	4	47 + x + y																									
	<b>OR</b>																										


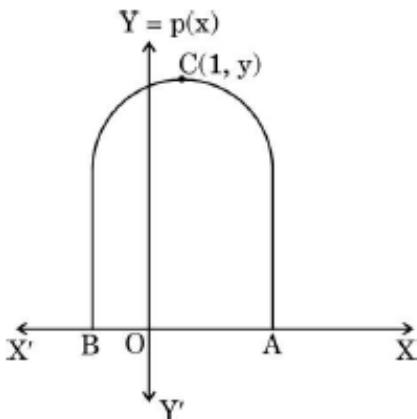
32 (b)	<p>Find mean and mode of the following distribution :</p> <table><tr><td><i>Class</i></td><td><i>Frequency</i></td></tr><tr><td>0 – 10</td><td>3</td></tr><tr><td>10 – 20</td><td>6</td></tr><tr><td>20 – 30</td><td>11</td></tr><tr><td>30 – 40</td><td>10</td></tr><tr><td>40 – 50</td><td>13</td></tr><tr><td>50 – 60</td><td>3</td></tr><tr><td>60 – 70</td><td>4</td></tr></table>	<i>Class</i>	<i>Frequency</i>	0 – 10	3	10 – 20	6	20 – 30	11	30 – 40	10	40 – 50	13	50 – 60	3	60 – 70	4																															
<i>Class</i>	<i>Frequency</i>																																															
0 – 10	3																																															
10 – 20	6																																															
20 – 30	11																																															
30 – 40	10																																															
40 – 50	13																																															
50 – 60	3																																															
60 – 70	4																																															
Sol.	<table><tr><td><b>Class</b></td><td><math>x_i</math></td><td><math>f_i</math></td><td><math>u_i = \frac{x_i - 35}{10}</math></td><td><math>f_i u_i</math></td></tr><tr><td>0 – 10</td><td>5</td><td>3</td><td>–3</td><td>– 9</td></tr><tr><td>10 – 20</td><td>15</td><td>6</td><td>–2</td><td>– 12</td></tr><tr><td>20 – 30</td><td>25</td><td>11</td><td>–1</td><td>– 11</td></tr><tr><td>30 – 40</td><td>35</td><td>10</td><td>0</td><td>0</td></tr><tr><td>40 – 50</td><td>45</td><td>13</td><td>1</td><td>13</td></tr><tr><td>50 – 60</td><td>55</td><td>3</td><td>2</td><td>6</td></tr><tr><td>60 – 70</td><td>65</td><td>4</td><td>3</td><td>12</td></tr><tr><td>Total</td><td></td><td><b>50</b></td><td></td><td><b>– 1</b></td></tr></table> <p>Correct table</p> <p>Mean = <math>35 + \frac{(-1)}{50} \times 10 = 34.8</math></p> <p>Modal class is 40 – 50.</p> <p>Mode = <math>40 + \left( \frac{13-10}{2 \times 13 - 10 - 3} \right) \times 10</math> = 42.3 (approx.)</p>	<b>Class</b>	$x_i$	$f_i$	$u_i = \frac{x_i - 35}{10}$	$f_i u_i$	0 – 10	5	3	–3	– 9	10 – 20	15	6	–2	– 12	20 – 30	25	11	–1	– 11	30 – 40	35	10	0	0	40 – 50	45	13	1	13	50 – 60	55	3	2	6	60 – 70	65	4	3	12	Total		<b>50</b>		<b>– 1</b>	<p><b>I</b></p> <p><b>II</b></p> <p><b>III</b></p> <p><b>IV</b></p> <p><b>V</b></p>	<p><b>2</b></p> <p><b>1</b></p> <p><math>\frac{1}{2}</math></p> <p><b>1</b></p> <p><math>\frac{1}{2}</math></p>
<b>Class</b>	$x_i$	$f_i$	$u_i = \frac{x_i - 35}{10}$	$f_i u_i$																																												
0 – 10	5	3	–3	– 9																																												
10 – 20	15	6	–2	– 12																																												
20 – 30	25	11	–1	– 11																																												
30 – 40	35	10	0	0																																												
40 – 50	45	13	1	13																																												
50 – 60	55	3	2	6																																												
60 – 70	65	4	3	12																																												
Total		<b>50</b>		<b>– 1</b>																																												


33.	<p>In <math>\triangle ABC</math>, AD is a median. X is a point on AD such that <math>AX : XD = 2 : 3</math>. BX is extended so that it intersects AC at Y. Prove that <math>BX = 4 XY</math>.</p> 		
Sol.	 <p>Draw <math>DZ \parallel BY</math>.</p> <p>In <math>\triangle CBY</math>, <math>DZ \parallel BY</math></p> $\therefore \frac{CD}{DB} = \frac{CZ}{ZY} = 1$ <p>Therefore, <math>DZ = \frac{1}{2} BY</math> --- (i)</p> <p>In <math>\triangle ADZ</math>, <math>DZ \parallel XY</math></p> <p>So, <math>\triangle AXY \sim \triangle ADZ</math></p> $\therefore \frac{AX}{AD} = \frac{XY}{DZ}$ $\Rightarrow \frac{2}{5} = \frac{XY}{DZ} \text{ or } DZ = \frac{5}{2} XY \text{ ---- (ii)}$ <p>Using (i) and (ii),</p> $BY = 5 XY$ <p>Therefore <math>BX = BY - XY = 4 XY</math></p> <p><b>Alternate solution:</b></p>  <p>Draw <math>DZ \parallel BY</math>.</p> <p><math>\triangle AXY \sim \triangle ADZ</math></p> $\therefore \frac{AX}{AD} = \frac{XY}{DZ} \Rightarrow \frac{2}{2+3} = \frac{XY}{DZ}$	<p><b>I</b></p> <p><b>II</b></p> <p><b>III</b></p> <p><b>IV</b></p> <p><b>V</b></p> <p><b>VI</b></p> <p><b>VII</b></p> <p><b>I</b></p> <p><b>II</b></p>	<p><math>\frac{1}{2}</math></p> <p><b>1</b></p> <p><math>\frac{1}{2}</math></p> <p><b>1</b></p> <p><math>\frac{1}{2}</math></p> <p><b>1</b></p> <p><math>\frac{1}{2}</math></p> <p><math>\frac{1}{2}</math></p> <p><math>\frac{1}{2}</math></p>



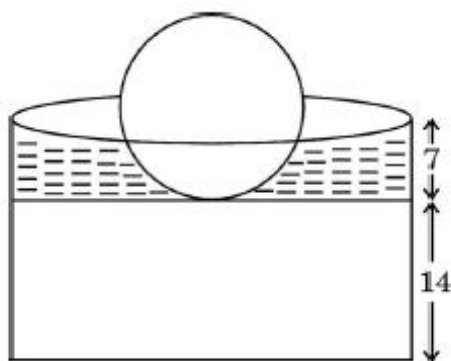


34 (b)	<p>Five years ago, Adil was thrice as old as Bharat. Ten years later Adil shall be twice as old as Bharat. To know the present ages of Adil and Bharat :</p> <p>(i) form the linear equations representing the above information.</p> <p>(ii) show that the system of equations is consistent with unique solution.</p> <p>(iii) find the present ages of Adil and Bharat.</p>		
Sol.	<p>Let the present ages of Adil and Bharat be 'x' years and 'y' years respectively.</p> <p>(i) According to the given statements</p> $(x - 5) = 3 \times (y - 5)$ $\Rightarrow x - 3y = -10 \quad \text{--- (1)}$ $(x + 10) = 2 \times (y + 10)$ $\Rightarrow x - 2y = 10 \quad \text{--- (2)}$ <p>(ii) Here, <math>\frac{a_1}{a_2} = \frac{1}{1}, \frac{b_1}{b_2} = \frac{-3}{-2}</math> or <math>\frac{3}{2}</math></p> <p>Since <math>\frac{a_1}{a_2} \neq \frac{b_1}{b_2}</math></p> <p>Therefore, system of equations is consistent with unique solution.</p> <p>(iii) Solving equations (1) &amp; (2), we get</p> $x = 50 \text{ and } y = 20$ <p>Therefore, the present ages of Adil and Bharat are 50 years and 20 years respectively.</p>	<p>I</p> <p>II</p> <p>III</p> <p>IV</p>	<p>1</p> <p>1</p> <p>1</p> <p>1 + 1</p>
35.	<p>A boy standing on a horizontal plane is flying a kite with a string of length 60 m, at an angle of elevation of <math>30^\circ</math>. Another boy standing on the roof of a 20 m high building, finds the angle of elevation of same kite to be <math>45^\circ</math>. If both the boys are on opposite sides of the kite, find the distance of the first boy from the base of the building. Also, find the height of the kite from the ground. (Use <math>\sqrt{3} = 1.73</math>)</p>		
Sol.	 <p style="text-align: right;">Correct figure</p>	I	1

	<p>Let K be the position of kite.</p> <p>Let <math>KL = h</math>, <math>CP = x</math> &amp; <math>PB = y</math></p> <p>In rt. angled <math>\Delta KPB</math></p> $\frac{h+20}{60} = \sin 30^\circ = \frac{1}{2}$ <p><math>\Rightarrow h = 10</math></p> <p>Also, <math>\frac{y}{60} = \cos 30^\circ = \frac{\sqrt{3}}{2}</math></p> <p><math>\Rightarrow y = 30\sqrt{3} = 30 \times 1.73 = 51.9</math></p> <p>In rt. angled <math>\Delta KLM</math></p> $\frac{10}{x} = \tan 45^\circ = 1$ <p><math>\Rightarrow x = 10</math></p> <p>Height of kite from ground is <math>10 + 20 = 30</math> m</p> <p>Distance of first boy from the base of the building = <math>51.9 + 10 = 61.9</math> m</p>	<p><b>II</b></p> <p><b>III</b></p> <p><b>IV</b></p> <p><b>V</b></p> <p><b>VI</b></p> <p><b>VII</b></p> <p><b>VIII</b></p> <p><b>IX</b></p>	<p><math>\frac{1}{2}</math></p> <p><math>\frac{1}{2}</math></p> <p><math>\frac{1}{2}</math></p> <p><math>\frac{1}{2}</math></p> <p><math>\frac{1}{2}</math></p> <p><math>\frac{1}{2}</math></p> <p><math>\frac{1}{2}</math></p> <p><math>\frac{1}{2}</math></p>
	<p style="text-align: center;"><b>SECTION E</b></p> <p>This section has <b>3</b> case study based questions carrying 4 marks each.</p>		
36.	<p style="text-align: center;"><b>Case Study – 1</b></p> <p>During a theatre drama, a backdrop of building arches was used. The shape of the curve shown below can be represented by the polynomial <math>p(x) = -x^2 + 2x + 8</math>, where <math>x</math> is the length (in feet) on stage level.</p> <div style="display: flex; align-items: center; justify-content: center;">   </div> <p>Based on the figure given above, answer the following questions :</p> <p>(i) Determine the height of the arch.</p> <p>(ii) (a) Find zeroes of the polynomial <math>p(x)</math>. Which points on the graph represent the zeroes ?</p> <p style="text-align: center;"><b>OR</b></p>		

	<p>(ii) (b) Find the span of the arch on the stage floor.</p> <p>(iii) Write the coordinates of the point of intersection of the above curve with the y-axis.</p>		
<b>Sol.</b>	<p>(i) <math>p(1) = -(1)^2 + 2 \times 1 + 8 = 9</math> So, height of the arch is 9 feet.</p> <p>(ii) (a) <math>p(x) = -x^2 + 2x + 8</math>  <math display="block">= -(x - 4)(x + 2)</math> <math>\therefore</math> zeroes are <math>-2</math> and <math>4</math>.  Points B and A on the graph represent the zeroes.</p> <p style="text-align: center;"><b>OR</b></p> <p>(ii) (b) <math>p(x) = -x^2 + 2x + 8</math>  <math display="block">= -(x - 4)(x + 2)</math> <math>\therefore</math> zeroes are <math>-2</math> and <math>4</math>.  Hence, Coordinates of point A and B are <math>(4, 0)</math> and <math>(-2, 0)</math> respectively.  Span of the arch on the stage floor, <math>AB = 4 + 2 = 6</math>  So, span of the arch on the stage floor is 6 feet.</p> <p>(iii) <math>p(0) = -(0)^2 + 2 \times 0 + 8 = 8</math>  <math>\therefore</math> the given curve intersects y-axis at <math>(0, 8)</math></p>	<p><b>I</b></p> <p><b>I</b></p> <p><b>II</b></p> <p><b>III</b></p> <p><b>I</b></p> <p><b>II</b></p> <p><b>III</b></p> <p><b>I</b></p> <p><b>II</b></p>	<p><b>1</b></p> <p><math>\frac{1}{2}</math></p> <p><math>\frac{1}{2}</math></p> <p><b>1</b></p> <p><math>\frac{1}{2}</math></p> <p><math>\frac{1}{2}</math></p> <p><b>1</b></p> <p><math>\frac{1}{2}</math></p> <p><math>\frac{1}{2}</math></p>
<b>37.</b>	<p style="text-align: center;"><b>Case Study – 2</b></p> <p>A group of friends wanted to play cards with two identical packs together. While shuffling the cards, three cards are dropped. Rest of the cards are shuffled and one card is drawn at random. Assuming that the dropped cards were a queen of hearts, a ten of spades and an ace of clubs, answer the following questions :</p> <div style="text-align: center;">  </div>		

	<p>(i) Find the probability that the drawn card is a face card.</p> <p>(ii) Find the probability that the drawn card is either a king or a queen.</p> <p>(iii) (a) Do you think that the probability of getting a queen was higher if none of the cards were dropped ? Justify your answer.</p> <p style="text-align: center;"><b>OR</b></p> <p>(iii) (b) Find the probability that the drawn card is a jack. Compare it with the probability when none of the cards were dropped. In which case is the probability of getting a jack higher ?</p>		
<b>Sol.</b>	<p>Total number of cards = <math>2 \times 52 - 3 = 101</math></p> <p>(i) <math>P(\text{a face card}) = \frac{23}{101}</math></p> <p>(ii) <math>P(\text{either a king or a queen}) = \frac{15}{101}</math></p> <p>(iii) (a) Yes</p> <p><math>P(\text{a queen when no cards were dropped}) = \frac{8}{104}</math></p> <p><math>P(\text{a queen when cards were dropped}) = \frac{7}{101}</math></p> <p><math>\therefore \frac{8}{104} &gt; \frac{7}{101}</math> as <math>808 &gt; 728</math></p> <p>So probability of getting a queen was higher if none of the cards were dropped.</p> <p style="text-align: center;"><b>OR</b></p> <p>(iii) (b) <math>P(\text{a jack when cards were dropped}) = \frac{8}{101}</math></p> <p><math>P(\text{a jack when no cards were dropped}) = \frac{8}{104}</math></p> <p>Since <math>\frac{8}{101} &gt; \frac{8}{104}</math> as <math>101 &lt; 104</math></p> <p>Therefore probability of getting a jack is higher when 3 cards were dropped.</p>	<p><b>I</b></p> <p><b>I</b></p> <p><b>I</b></p> <p><b>II</b></p> <p><b>III</b></p> <p><b>IV</b></p> <p><b>I</b></p> <p><b>II</b></p> <p><b>III</b></p>	<p><b>1</b></p> <p><b>1</b></p> <p><math>\frac{1}{2}</math></p> <p><math>\frac{1}{2}</math></p> <p><math>\frac{1}{2}</math></p> <p><math>\frac{1}{2}</math></p> <p><math>\frac{1}{2}</math></p> <p><b>1</b></p>
<b>38.</b>	<p style="text-align: center;"><b>Case Study – 3</b></p> <p>A model of Leafy Ball Fountain is made to be kept on the tabletop. Water gently cascades down the ball into a decorative cylindrical pool where it is recycled.</p> <p>The diameter of spherical ball is 21 cm.</p> <p>Cylindrical pool – Outer diameter is 50 cm and inner diameter is 40 cm.</p> <p>Height of solid base is 14 cm.</p> <p>Height of water filled is 7 cm.</p>		



Observe the figure and answer the following questions :

- (i) Determine the total height of the fountain.
- (ii) Find the volume of the ball.
- (iii) (a) If one-third of the ball is submerged in the water, find the volume of the water filled in the pool.

**OR**

- (iii) (b) Find the sum of the outer curved surface area of the cylindrical part and surface area of the ball.

<b>Sol.</b>	<p>(i) Total height of the fountain = <math>14 + 21 = 35</math> cm</p> <p>(ii) Volume of the ball = <math>\frac{4}{3} \times \frac{22}{7} \times \frac{21}{2} \times \frac{21}{2} \times \frac{21}{2}</math>  <math>= 4851 \text{ cm}^3</math></p> <p>(iii) (a) Volume of water = Volume of inner upper part <math>-\frac{1}{3} \times</math> Volume of the ball  <math>= \frac{22}{7} \times 20 \times 20 \times 7 - \frac{1}{3} \times 4851</math>  <math>= 7183 \text{ cm}^3</math></p> <p style="text-align: center;"><b>OR</b></p> <p>(iii) (b) Required area = Outer CSA of cylindrical part + Surface area of the ball  <math>= 2 \times \frac{22}{7} \times 25 \times (14 + 7) + 4 \times \frac{22}{7} \times \frac{21}{2} \times \frac{21}{2}</math>  <math>= 4686 \text{ cm}^2</math></p>	<p><b>I</b></p> <p><b>I</b></p> <p><b>II</b></p> <p><b>I</b></p> <p><b>II</b></p> <p><b>I</b></p> <p><b>II</b></p>	<p><b>1</b></p> <p><math>\frac{1}{2}</math></p> <p><math>\frac{1}{2}</math></p> <p><b>1</b></p> <p><b>1</b></p> <p><b>1</b></p> <p><b>1</b></p>
-------------	---	--	---